

Name:

Datum:

### Gemessene Temperaturen

Trage die Temperaturen in die Thermometer farbig ein. Was könnte damit gemessen worden sein?

1.)




7 °C

2.)



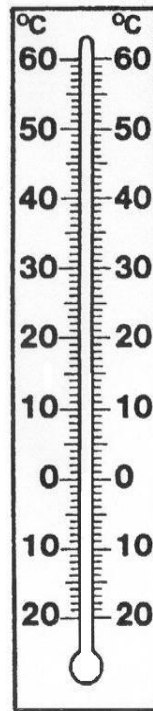
37 °C

3.)



22 °C

4.)








0 °C

5.)



-6 °C

					
Thermometer Nr.					
Temperatur in °C					