


Name:

Datum:

Temperaturen

1. Lies die Temperatur der Thermometer ab und schreibe sie darunter.

1)



_____ °C

2)




_____ °C

3)




_____ °C

4)



_____ °C

5)



_____ °C